
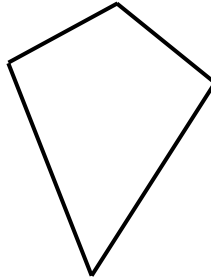
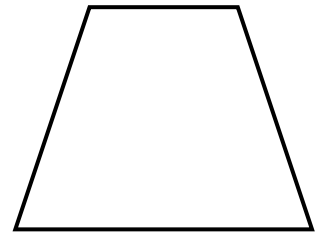

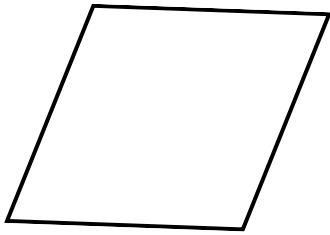


# Types of Quadrilaterals

## Task 1

Name the following shapes.



## Task 2

For each shape above:

Colour the angles which are the same, the same colour.

Colour the sides which are the same length, the same colour.

Mark sides which are parallel with an arrow head.

Draw a little square on the right-angles.

## Task 3

Colour all of the quadrilaterals.

