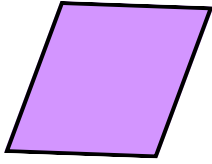




Types of Quadrilaterals

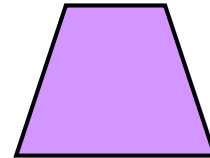
Task 1

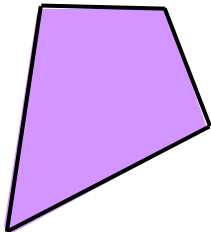
Name the shape and explain how you know.














Task 2

For each shape above:

Colour the angles which are the same, in the same colour.

Colour the sides which are the same length, the same colour.

Mark sides which are parallel with an arrow head.

Draw a little box on the right-angles.